



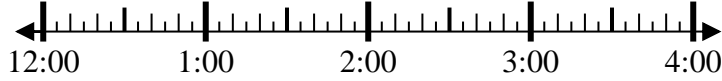
Solve each problem.

Answers

1) Start: _____

Elapsed: 2 hrs & 50 mins

End: 3:15

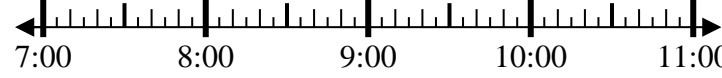


1. _____

2) Start: _____

Elapsed: 2 hrs & 25 mins

End: 9:30

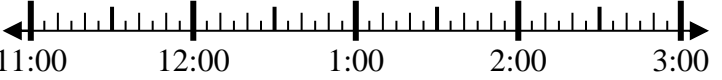


2. _____

3) Start: _____

Elapsed: 1 hr & 20 mins

End: 12:25

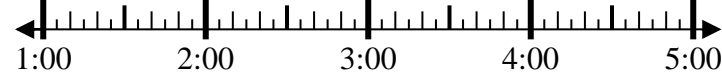


3. _____

4) Start: _____

Elapsed: 2 hrs & 15 mins

End: 3:25

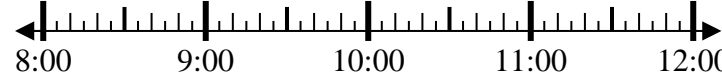


4. _____

5) Start: _____

Elapsed: 2 hrs & 30 mins

End: 10:35

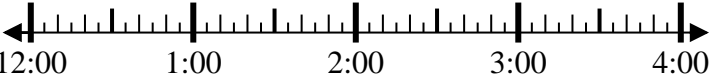


5. _____

6) Start: _____

Elapsed: 1 hr & 10 mins

End: 1:40

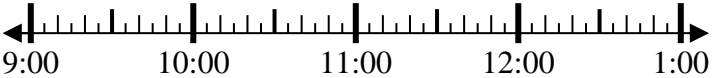


6. _____

7) Start: _____

Elapsed: 1 hr & 35 mins

End: 11:15

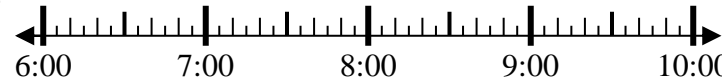


7. _____

8) Start: _____

Elapsed: 2 hrs & 15 mins

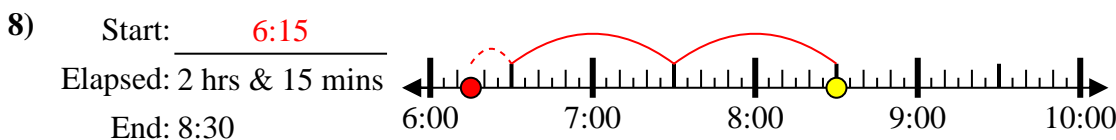
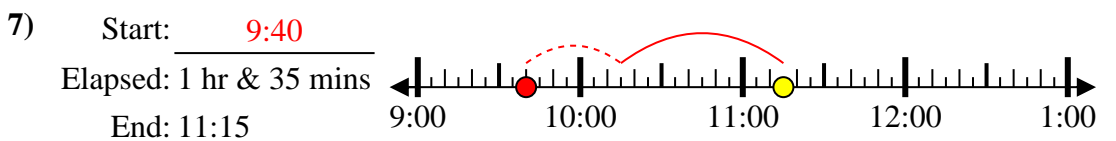
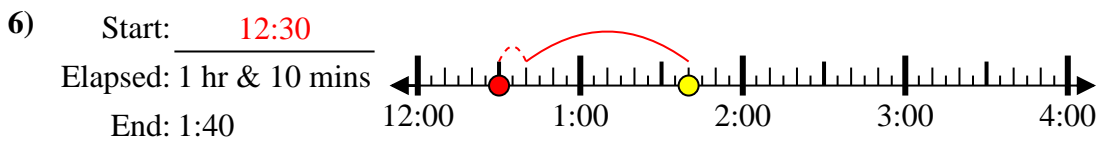
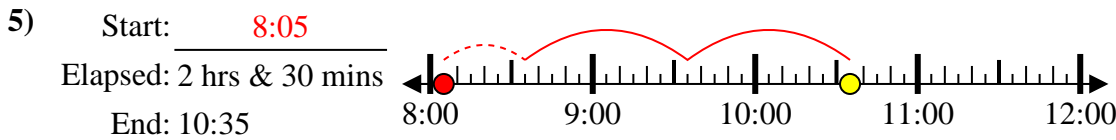
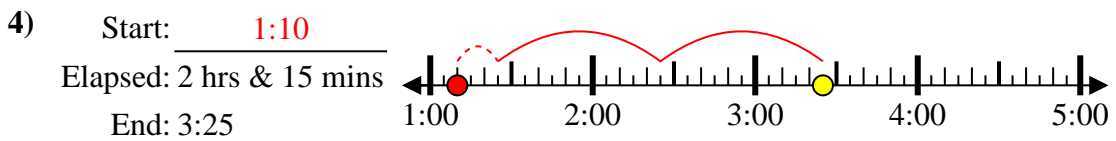
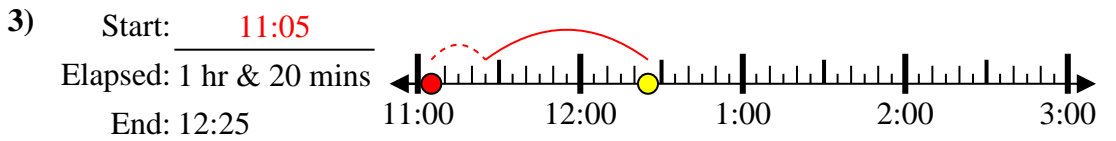
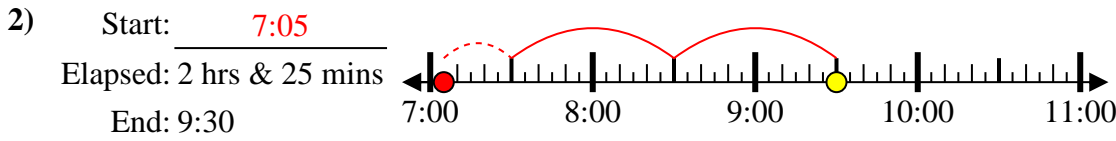
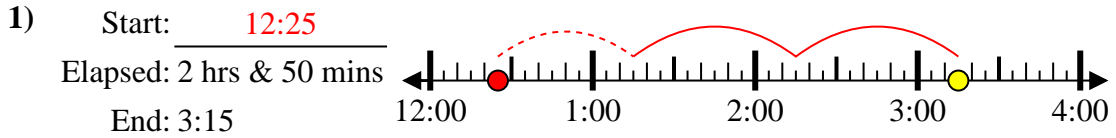
End: 8:30



8. _____



Solve each problem.



Answers

1. 12:25

2. 7:05

3. 11:05

4. 1:10

5. 8:05

6. 12:30

7. 9:40

8. 6:15